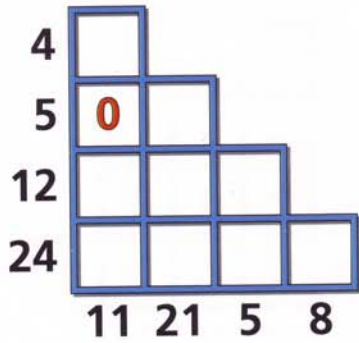


Numeral Nightmare

Rating 3 Points




Place the digits 1 to 9 (0 as shown) in the boxes so that they add to the totals shown against each row and column.

69

Pig Pen

Rating 1 Point




Patrick the pig farmer's pigs are kept in this polygonal pigpen with eight sections. Patrick wants to replace the fencing around all the sections. Can he travel around the whole pen, replacing the fencing as he goes, without stopping and without going along the same stretch of fence twice?

75

Shape Up

Rating 2 Points

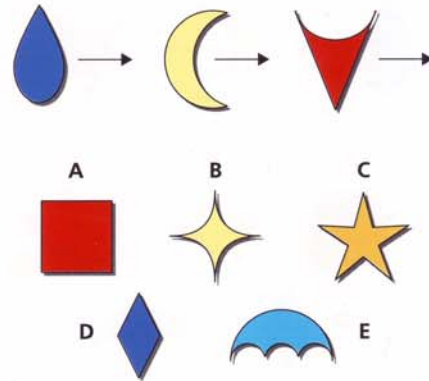


Which of these shapes is the odd one out?

55

Take your Pick

Rating 2 Points



Most of the shapes above could be used to complete this sequence. Which one couldn't?

67