


Square Numbers

Rating 2 Points

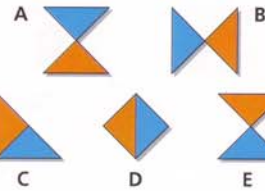


How many different squares can you find in this 4 x 4 grid?

37

Triangle Tricks

Rating 2 Points




Which of the options here continues the sequence at the top?

39

Square Search

Rating 1 Point




How many squares can you count in the grid above?

51

Metal Links

Rating 2 Points



Eight balls are positioned on the corners of an imaginary cube. Each ball is connected to every other ball by a metal rod. How many rods are there?

41